



# Summer Packet

## Rising First Graders




**Monday**


Draw lines that show how to divide each shape.




halves




halves




halves



fourths



fourths



fourths

**Tuesday**

Read the word family words below. Write 4 more words that rhyme with them.

**cake**

**flake**

---

---

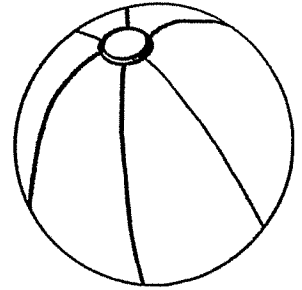
---

---

Wednesday

Juan and his friends need 12 beach balls. They have 8.  
How many more do they need?

Show your answer by drawing a picture and writing a number sentence.



Thursday

Read the words below. Use them to fill in the blanks. Read the sentences.

**four**      **walk**      **Ask**      **Please**


\_\_\_\_\_ help them get some cake.

\_\_\_\_\_ them to go with us.

The \_\_\_\_\_ kids like to jump.

Did she take a \_\_\_\_\_ ?

**Friday**



Find the sum of each addition problem.  
Follow the key to color the picture.

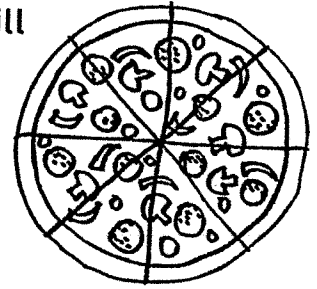
15 = red  
16 = blue  
17 = green  
18 = brown

**Monday**

Read each word. Color the REAL words red. Color the NONSENSE words blue.

chat	chin	plab	strap
trip	clip	brip	shop
drop	bath	math	sosh
thub	push	club	shrug
flop	thin	twin	twip
flip	clip	chip	blop

Tuesday Ron is serving pizza at his birthday party. There is 1 pizza left. Four friends still need pizza. If the 4 friends share the pizza equally, how many slices will each of them get? Draw a picture to show your answer. Describe it.



Wednesday

Read one of your favorite stories. Write at least 4 sentences retelling what happened.

---

---

---

---

---

---

**Thursday**

Say each number. Add 10 to each number. Write the number that is 10 MORE on the line.

24

\_\_\_\_\_

32

\_\_\_\_\_

36

\_\_\_\_\_

12

\_\_\_\_\_

55

\_\_\_\_\_

63

\_\_\_\_\_

48

\_\_\_\_\_

71

\_\_\_\_\_

17

\_\_\_\_\_

99

\_\_\_\_\_

**Friday**

Cut out the words. Use them to make a sentence. Write it below.

\_\_\_\_\_

\_\_\_\_\_

saw

Who

this

open?

door

Monday

Solve these subtraction problems by filling in the missing numbers.

$8 - \underline{\quad\quad\quad} = 5$

$10 - \underline{\quad\quad\quad} = 5$

$\underline{\quad\quad\quad} - 3 = 4$

$\underline{\quad\quad\quad} - 4 = 3$

$11 - \underline{\quad\quad\quad} = 6$

$6 - \underline{\quad\quad\quad} = 1$

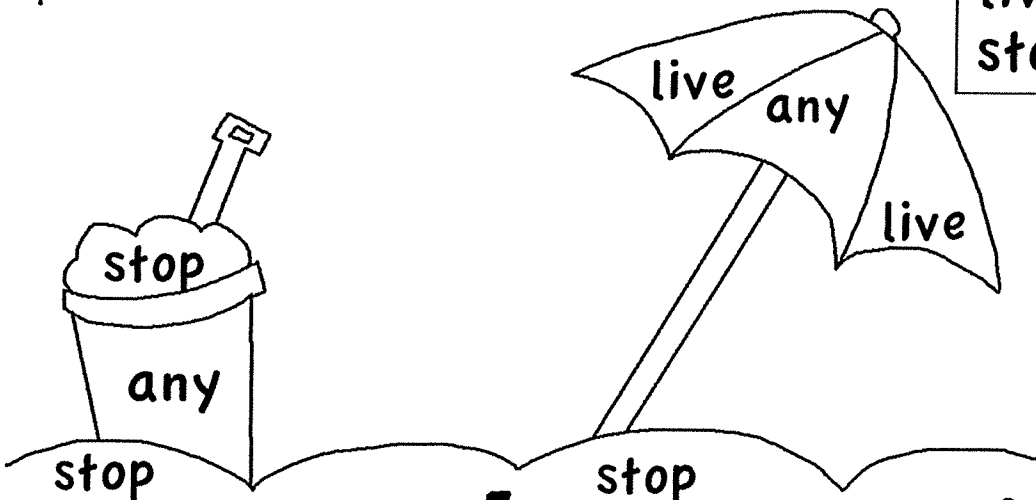
$\underline{\quad\quad\quad} - 7 = 3$

$8 - \underline{\quad\quad\quad} = 6$

Tuesday

Read the sight words. Use the key to color the picture.

any = red  
live = blue  
stop = brown



Beach Fun!

Wednesday

Count to 100 by 5s. Write the missing numbers.

5

\_\_\_\_\_

30

\_\_\_\_\_

55

\_\_\_\_\_

80

\_\_\_\_\_

Thursday

Write several sentences to retell one of your favorite stories. Also, tell what lesson the story teaches.

\_\_\_\_\_

\_\_\_\_\_

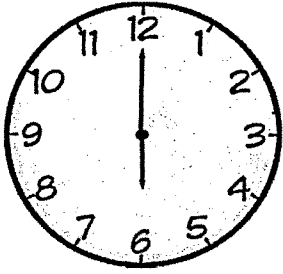
\_\_\_\_\_

\_\_\_\_\_


\_\_\_\_\_



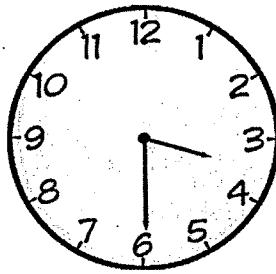
**Friday** Write the time you see on each clock.



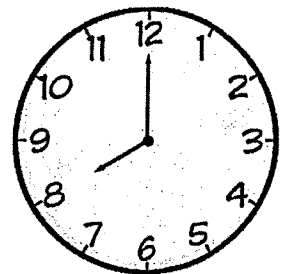
:




:




:



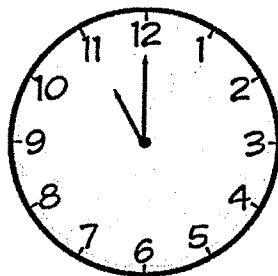
:



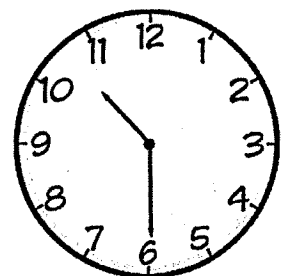
:



:



:



:

**Monday** Draw a picture of something fun that you did last weekend. Write at least 2 sentences to describe your picture.


---

---

---

Tuesday

Color the picture. Color numbers LESS THAN 50 orange. Color numbers GREATER THAN 50 green.



Wednesday

Read the word family words below. Write 4 more words that rhyme with them.

**weak**

**streak**

\_\_\_\_\_

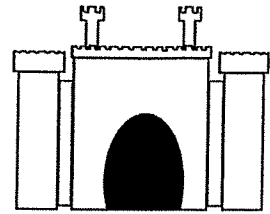
\_\_\_\_\_

\_\_\_\_\_

\_\_\_\_\_

**Thursday**

Draw your own sand castle. Start with a big square. Add 2 rectangles for towers. Make a door with a half oval shape. Decorate your castle with windows shaped like triangles.



**Friday**

Read your favorite book. Write 2 or 3 sentences describing the main character in the story.

---

---

---

---

---

---

Monday

fill in the missing numbers. Practice counting all the way to 120.

1	2	_____	4	5	6	7	_____	9	10
11	_____	13	14	15	_____	17	18	_____	20
21	22	23	_____	25	26	27	28	29	30
31	_____	33	34	35	36	_____	38	39	40
41	42	43	44	_____	46	47	48	_____	50
_____	52	53	54	55	_____	57	58	59	_____
61	62	_____	64	65	66	_____	68	69	70
71	_____	73	74	75	_____	77	78	79	80
81	82	_____	84	85	_____	87	88	_____	90

Tuesday

Cut out the words. Use them to make a sentence. Write it below.

---

---

over | he | Did | there? | fly

Wednesday

Solve these number sentences.

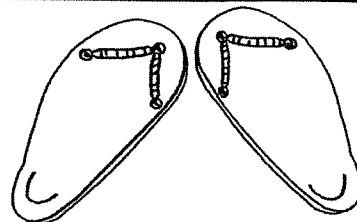
$8 + 3 = \underline{\quad}$

$3 + 8 = \underline{\quad}$

$2 + 6 + 4 = 2 + \underline{\quad}$

$3 + 7 + 3 = 3 + \underline{\quad}$

$8 + 1 + 9 = 8 + \underline{\quad}$



$7 + 5 = \underline{\quad}$

$5 + 7 = \underline{\quad}$

$5 + 6 = \underline{\quad}$

$6 + 5 = \underline{\quad}$

$7 + 4 = \underline{\quad}$

Thursday Read the sentences. Circle the word GOING every time you see it.  
Underline the word LIKES every time it appears.

Stan is going to have fun in the sun.


He always likes to ride his bike.

Stan likes to ride around the trees in the park.

He is going to catch butterflies.

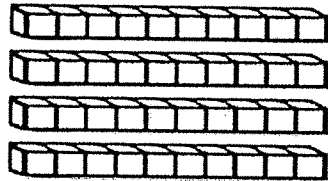
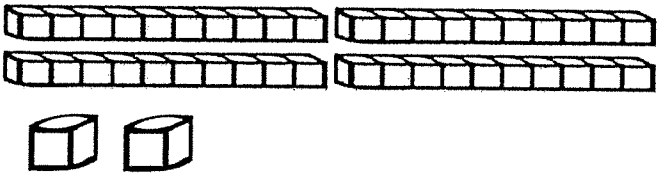
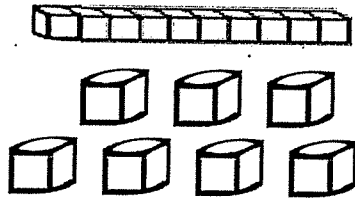
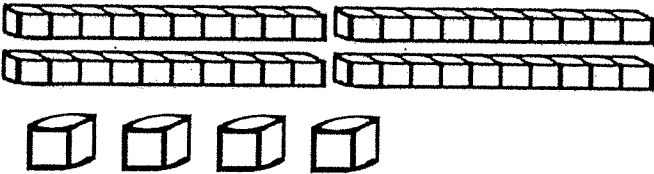
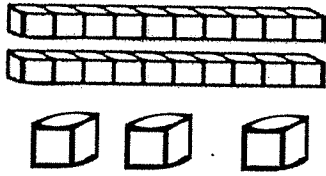
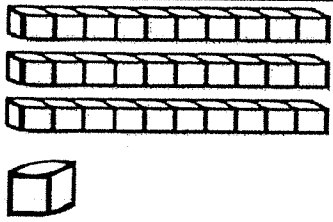
Stan's little dog likes going to the park, too.

Stan and Spot are going there to have some fun!



**Friday**

Count the blocks. Write the number.



**Monday**

What do you like to do on a rainy day? Write 2 or 3 sentences about it. Draw an illustration to go with your sentences.

---


---

---

**Tuesday** Jack and Jill both found one or more shells on the beach. Together, they found 5 shells. How many shells could each of them have found?

Jack found \_\_\_\_\_ and Jill found \_\_\_\_\_.

\_\_\_\_\_ + \_\_\_\_\_ = 5



Jack found \_\_\_\_\_ and Jill found \_\_\_\_\_.

\_\_\_\_\_ + \_\_\_\_\_ = 5

Jack found \_\_\_\_\_ and Jill found \_\_\_\_\_.

\_\_\_\_\_ + \_\_\_\_\_ = 5

Jack found \_\_\_\_\_ and Jill found \_\_\_\_\_.

\_\_\_\_\_ + \_\_\_\_\_ = 5

**Wednesday**

Say each number. Subtract 10. Write the number that is 10 LESS THAN each number.

34

\_\_\_\_\_

52

\_\_\_\_\_

46

\_\_\_\_\_

62

\_\_\_\_\_

57

\_\_\_\_\_

83

\_\_\_\_\_

28

\_\_\_\_\_

71

\_\_\_\_\_


17

\_\_\_\_\_

91

\_\_\_\_\_

**Thursday** Draw one short beach umbrella. Draw one tall beach umbrella.  
Label one "short" and one "tall."  
Measure each umbrella with blocks, paper clips, or other  
small objects.



**Friday**

Read the word family words below. Write 4 more words that rhyme with them.

**meat**

**treat**

---

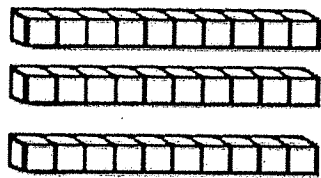
---

---

---



Monday



This is the number **32**  
shown as tens and ones.

Now make the number **57** using tens and ones. Draw the blocks.

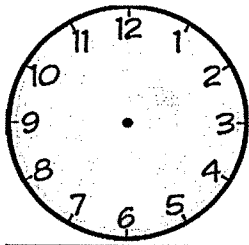
Tuesday

Read each word. Color the REAL words green. Color the NONSENSE words orange.

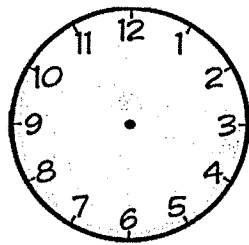
cope	rope	zope	slope
neat	wheat	neat	leat
beet	reet	feet	sweet
cape	tape	scrape	zape
flune	tune	dune	June
bone	stone	throne	vone

Wednesday

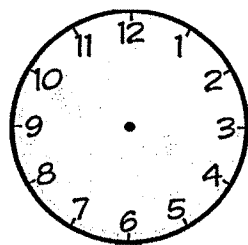
Draw the correct time on each clock.



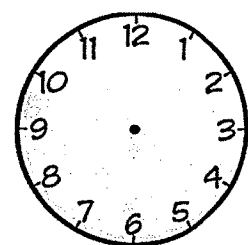
5 : 00



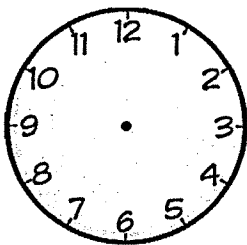
7 : 30



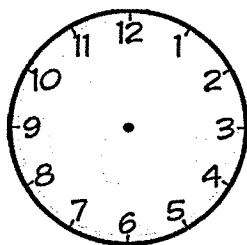
11 : 30



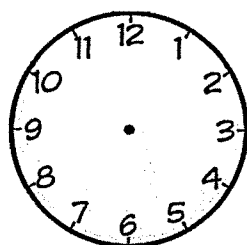
8 : 00



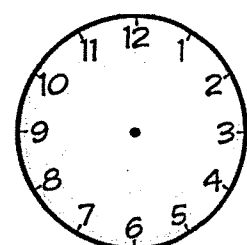
4 : 30



3 : 00



1 : 30



2 : 00

Thursday

Cut out the words. Use them to make a sentence. Write it below.

\_\_\_\_\_

\_\_\_\_\_

him

Thank

for

help.

his

**Friday**

Solve these addition problems.

$8 + 2 = \underline{\hspace{2cm}}$

$9 + 1 = \underline{\hspace{2cm}}$

$5 + 10 = \underline{\hspace{2cm}}$

$2 + 10 = \underline{\hspace{2cm}}$

$7 + 3 = \underline{\hspace{2cm}}$

$5 + 5 = \underline{\hspace{2cm}}$

$6 + 3 = \underline{\hspace{2cm}}$

$3 + 5 = \underline{\hspace{2cm}}$

**Monday**

Read the words below. Use them to fill in the blanks. Read the sentences.

**after**      **again**      **Could**      **from**

Are they going \_\_\_\_\_ dinner?

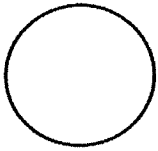
\_\_\_\_\_ you please help him?

When will they be here \_\_\_\_\_ ?

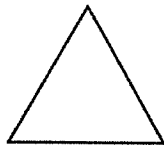
Where were the two boys \_\_\_\_\_ ?

Tuesday

Read each clue. Guess the shape.




circle



triangle



rectangle



square

1. It has 4 sides that are all the same length.

2. It has 3 sides.

3. It has no sides and no angles.

3. It has 2 long sides and 2 short sides. The angles are the same.

Wednesday

Read the sentences. Circle the word AFTER every time you see it. Underline the word THEY every time you see it.

They were going to a birthday party.

Five of Sam's friends came to go with him.

When did they leave?


They all left after lunch and walked to the party.

After the party, they all went to play at the park.

Sam said that they had a very good day!

**Thursday**

Count each group of objects. Graph the number of objects you find in each group.



hats	pairs of shoes	surfboards	crabs

**Friday**

Look at your graph from yesterday and answer these questions.

How many objects did you count, altogether? \_\_\_\_\_

Which kind of object did you have the **GREATEST** number of?

\_\_\_\_\_

Which kind of object did you have the **LEAST** of?

\_\_\_\_\_

How many more shoes did you count than crabs?

\_\_\_\_\_

Monday

Circle the number sentences that are true.

$4 + 1 = 1 + 4$

$13 + 2 = 14$

$10 - 3 = 13$

$8 = 8$

$9 + 1 = 8 + 2$

$5 - 2 = 4 - 1$

$10 + 3 = 3 + 10$

$9 = 12 - 3$

Tuesday

Cut out the words. Use them to make a sentence. Write it below.

---

---

do

you

How

her?

know

**Wednesday**

Use the "counting on" strategy to solve these addition problems.

$12 + \begin{array}{ c } \hline \bullet \bullet \\ \bullet \bullet \\ \hline \end{array} = \underline{\hspace{2cm}}$	$6 + \begin{array}{ c } \hline \bullet \bullet \bullet \\ \bullet \bullet \bullet \\ \hline \end{array} = \underline{\hspace{2cm}}$
$14 + \begin{array}{ c } \hline \bullet \bullet \\ \bullet \bullet \\ \hline \end{array} = \underline{\hspace{2cm}}$	$7 + \begin{array}{ c } \hline \bullet \bullet \\ \bullet \bullet \bullet \\ \hline \end{array} = \underline{\hspace{2cm}}$
$8 + \begin{array}{ c } \hline \bullet \bullet \bullet \\ \hline \end{array} = \underline{\hspace{2cm}}$	$18 + \begin{array}{ c } \hline \bullet \bullet \\ \hline \end{array} = \underline{\hspace{2cm}}$
$9 + \begin{array}{ c } \hline \bullet \bullet \\ \hline \end{array} = \underline{\hspace{2cm}}$	$11 + \begin{array}{ c } \hline \bullet \\ \hline \end{array} = \underline{\hspace{2cm}}$

**Thursday**

What is your favorite summer activity? Write 2 or 3 sentences about it and draw a picture to illustrate your ideas.

---

---

**Friday**

Read a book. Answer the questions below.

Who is the author? \_\_\_\_\_

Who is the illustrator? \_\_\_\_\_

What was the problem in the story? \_\_\_\_\_

How was the problem solved? \_\_\_\_\_

**Monday**

Compare the numbers in each box. Use  $>$ ,  $=$ , and  $<$

12 \_\_\_ 52

22 \_\_\_ 12

10 \_\_\_ 60

72 \_\_\_ 72

12 \_\_\_ 21

13 \_\_\_ 31

33 \_\_\_ 34

98 \_\_\_ 97

11 \_\_\_ 11

25 \_\_\_ 50

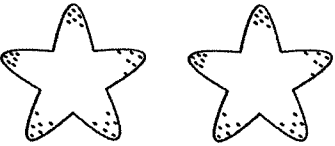


24 \_\_\_ 26

73 \_\_\_ 63



**Tuesday**

Count the number of sea stars. Answer the questions.



How many sea stars do you have?

\_\_\_\_\_

What if you found 4 more? \_\_\_\_\_

What if 5 of them went back into the ocean? \_\_\_\_\_

**Wednesday**

Read each word. Re-write each word, adding a "silent e" at the end. Read the new words you made.

scrap

\_\_\_\_\_

slid

\_\_\_\_\_

shin

\_\_\_\_\_

slop

\_\_\_\_\_

spin

\_\_\_\_\_

**Thursday**

Use the "counting on" strategy to solve these addition problems.

$12 + \begin{array}{ c } \hline \bullet \bullet \bullet \\ \bullet \bullet \bullet \\ \hline \end{array} = \underline{\hspace{2cm}}$	$7 + \begin{array}{ c } \hline \bullet \bullet \\ \bullet \\ \hline \end{array} = \underline{\hspace{2cm}}$
$11 + \begin{array}{ c } \hline \bullet \bullet \bullet \\ \bullet \bullet \bullet \\ \hline \end{array} = \underline{\hspace{2cm}}$	$14 + \begin{array}{ c } \hline \bullet \bullet \\ \bullet \bullet \\ \hline \end{array} = \underline{\hspace{2cm}}$
$6 + \begin{array}{ c } \hline \bullet \bullet \\ \bullet \\ \hline \end{array} = \underline{\hspace{2cm}}$	$9 + \begin{array}{ c } \hline \bullet \bullet \\ \bullet \\ \hline \end{array} = \underline{\hspace{2cm}}$
$8 + \begin{array}{ c } \hline \bullet \\ \hline \end{array} = \underline{\hspace{2cm}}$	$12 + \begin{array}{ c } \hline \bullet \bullet \\ \bullet \bullet \\ \hline \end{array} = \underline{\hspace{2cm}}$

**Friday**

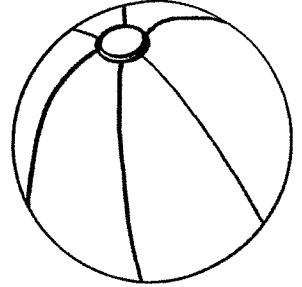
Compare the numbers in each box. Use  $>$ ,  $=$ , and  $<$

$32 \underline{\hspace{1cm}} 51$	$13 \underline{\hspace{1cm}} 31$	$15 \underline{\hspace{1cm}} 15$	$46 \underline{\hspace{1cm}} 40$
$98 \underline{\hspace{1cm}} 96$	$62 \underline{\hspace{1cm}} 81$	$39 \underline{\hspace{1cm}} 41$	$24 \underline{\hspace{1cm}} 42$
$12 \underline{\hspace{1cm}} 24$	$19 \underline{\hspace{1cm}} 19$	$1+2 \underline{\hspace{1cm}} 3$	$88 \underline{\hspace{1cm}} 77$

Wednesday

Juan and his friends need 12 beach balls. They have 8.  
How many more do they need?

Show your answer by drawing a picture and writing a number sentence.



Thursday

Read the words below. Use them to fill in the blanks. Read the sentences.

**four**      **walk**      **Ask**      **Please**

\_\_\_\_\_ help them get some cake.

\_\_\_\_\_ them to go with us.

The \_\_\_\_\_ kids like to jump.

Did she take a \_\_\_\_\_ ?